

Team Name: _____

Score _____ / **40**

2006 Wisconsin Environthon Wildlife Practicum Exam

1. Fur pelts (2 points each). Examine the specimens on the table. You may touch them, but are not allowed to physically move them.

A. Common Name: _____

B. Common Name: _____

C. Common Name: _____

D. Common Name: _____

E. Common Name: _____

F. Common Name: _____

G. Common Name: _____

2. Which of these skulls is a predator? Which of these is a prey species? Provide one reason for each decision. (1 pt for each skull)

A. Predator (Skull #):

a. _____
Reason:


b. _____
Reason:

B. Prey (Skull #):


c. _____
Reason:

d. _____
Reason:


3. Identify the species by observing these bird silhouettes: (2 pts each)




A. _____



B. _____



C. _____



D. _____

4. Skull Identification (1 pt each)

A. Skull 1:

Common Name: _____.

B. Skull 2:

Common Name: _____.

5. Question: What are three things you can learn about an animal through the use of radio telemetry? (1 pt each)

A. _____

B. _____

C. _____

6. Question: What are three sources of error that can occur while performing radio telemetry? (1 pt each)

A. _____

B. _____

C. _____

7. Traps (1 pt for trap name, 2 pts for animal names)

A. Trap 1

Common Name: _____.

Suitable for which animals? _____.

B. Trap 2

Common Name: _____.

Suitable for which animals? _____.